



twinkl.co.uk

# Thanks for not printing this page!

Simply print from page 2 in your printing options to avoid wasted paper & ink!



...your first choice for easy to use, trusted and high quality teaching materials for educators and parents worldwide - professionally crafted materials with a personal touch.

## A brief word about copyright...

By downloading this resource, you agree to the following:



You may use this resource for personal and/or classroom use only.

In order to support us, we ask that you always acknowledge [www.twinkl.co.uk](http://www.twinkl.co.uk) as the source of the resource. **If you love these resources, why not let others know about Twinkl?**



You must not reproduce or share this resource with others in any form. They are more than welcome to download the resource directly from us.

You must not host or in any other way share our resources directly with others, without our prior written permission.

We also ask that this product is not used for commercial purposes and also that you do not alter the digital versions of our products in any way.

## Thank you for downloading!


We hope you enjoy the resource and we'll see you very soon!



**Did you know we also have twinkl Premium for schools?**


Email [sales@twinkl.co.uk](mailto:sales@twinkl.co.uk) for more information.

# Maths Challenge Cards




twinkl

# Maths Challenge Cards




twinkl

# Maths Challenge Cards




twinkl

# Maths Challenge Cards



twinkl

Put 12 bees in the beehives. Each bee hive must have at least 1 more bee in than the previous one.



twinkl

Spiders have 8 legs and flies have 6 legs. There are 2 spiders and 1 fly. How many legs are there in total?



twinkl

How many different ways can you make the number 6?

$$\text{eg. } 2 + 2 + 2 = 6$$

$$8 - 2 = 6$$



twinkl

**The answer is 10.**

What is the question?

How many different questions can you think of?


twinkl

The first ladybird has 8 spots, the second ladybird has 7 spots and the last ladybird has 9 spots. How many spots are there altogether?




twinkl

The millipede is 6cm longer than the caterpillar. The caterpillar is 9cm long. How long is the millipede?



twinkl

Find two numbers next to each other that add up to 21.



twinkl

Barry, Brogan and Betty the butterflies are in a line. The colours of the butterflies are red, blue and purple.



Barry is in the middle and is red. Brogan is on the right and is not purple. Where is Betty and what colour is she?

twinkl

The answer is 15.

What is the question?

How many different questions can you think of?

twinkl

$$13 = \square + \square$$


How many different ways can you find to do this?

twinkl

How many different ways can you make the number 11?


$$\text{eg. } 2 + 4 + 5 = 11$$

$$14 - 3 = 11$$



twinkl


How long is the line? Use your ruler to measure it.



Kate rubs out 3cm of the line. How long is the line now?

twinkl


The caterpillar is 4 years older than the worm. The worm is 2 years old.



How old is the caterpillar?


twinkl

There are a total of 20 legs below. The spider has 8 legs, the beetle has 6 legs. How many legs does the lady bird have?



twinkl

Find two numbers next to each other that add up to 19.



twinkl

Add together the numbers

**1, 2, 3, 4, 5, 6, 7, 8, 9, 10**


What is the total?  
Can you find a quick way to do this?

twinkl

Choose 2 odd numbers and add them together. What do you notice?

Try this with different odd numbers.

1 3 5 7 9 11 13



What happens?  
Why does this happen?

twinkl

Choose 2 even numbers and add them together. What do you notice?


Try this with different even numbers.

2 4 6 8 10 12 14

Does this always happen?  
Why does this happen?

twinkl

Put 10 spiders in the trees. Each tree should have a different number of spiders in them.



twinkl

What happens when you add an odd number and an even number together?

15 10 9 12 16  
5 1 7 4 11 3

Does this always happen?  
Why does this happen?

twinkl